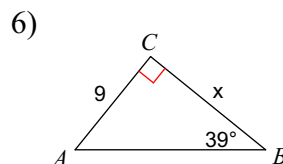
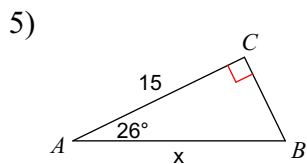
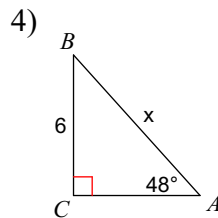
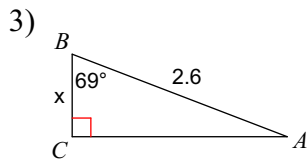
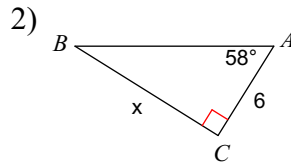
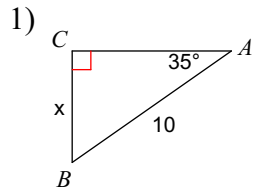
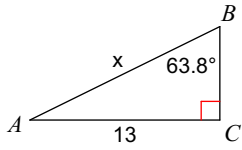


### 11.3 HW - Using Trig Functions to Find Missing Side Lengths

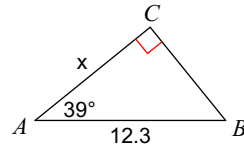
**Label the sides as opposite, adjacent, or hypotenuse. Write an equation involving sine, cosine, or tangent. Then, find the measure of each side indicated. Round to the nearest tenth.**



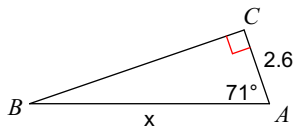
7)



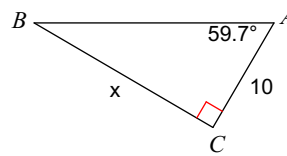
8)



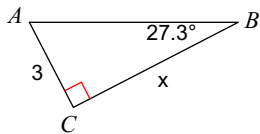
9)



10)



11)



12)

